

UNIT 9

Hydrosphere and atmosphere

CON

Name:

Class: Date:


1 Write what each sentence is describing.

Undulations of the surface of the sea caused by wind.

Masses of water that move within the ocean.

Variations of the sea level that occur every six hours.

2 Write the names of the elements of the hydrosphere that are marked in the image.



UNIT 9

Hydrosphere and atmosphere

CON

Name:

Class: Date:

3 Write T or F for each sentence about the atmosphere.

Correct the ones that are false.

☐

Most of the clouds and rain form in the troposphere.

☐

The ozone layer is in the mesosphere.

☐

Hot air balloons fly in the thermosphere.

☐

In the stratosphere there are very high temperatures and little oxygen.

.....

.....

.....

.....

4 Complete these sentences related to climate.

Latitude is distance from the and the It is
 in the equatorial regions than in the regions.
 is the height of land in relation to the sea level. It is colder in
 regions than at

A studies the atmosphere and makes predictions about the

5 Match the elements in the columns.

A. Wind gauge

B. Weather vane

C. Pluviometer

1. Measures the amount of rain

2. Measures the speed of wind

3. Indicates the direction of the wind

UNIT 9

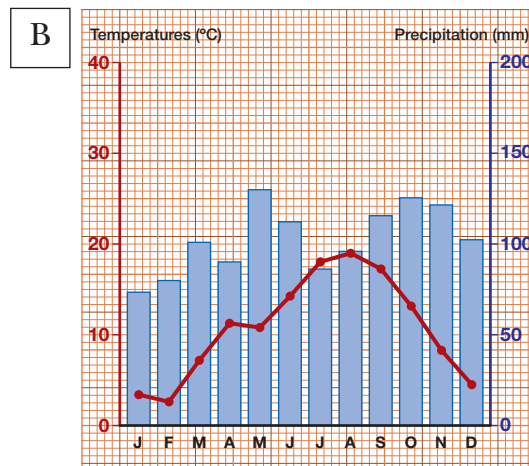
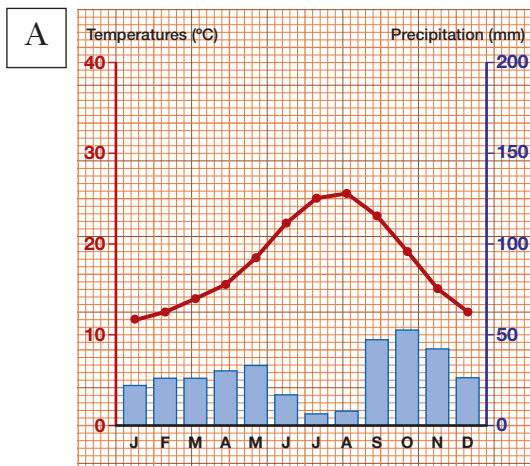
Hydrosphere and atmosphere

EX

Name:

Class: Date:

- 1 These climatograms correspond to two different areas, A and B. Look at them carefully and answer the questions.



- a) In which of the two areas has there been more precipitation? Write which month had the most precipitation and the amount of precipitation.

Area A:

.....

Area B:

.....

- b) Which area had the highest temperature? How high was the temperature?

.....

.....

- c) In graph A, which month had a temperature of 25 °C?

- d) In graph B, which month had 125 mm of precipitation?

.....

.....

UNIT 9

Hydrosphere and atmosphere

REV

Name:

Class: Date:

1 Fill in the empty spaces.

